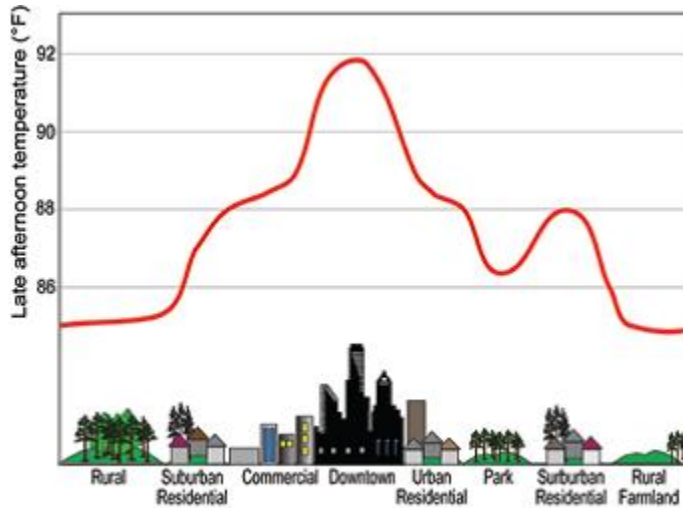


Student Sheet 7-2: Drawing Conclusions

DIRECTIONS: Analyze the following graphs and write a conclusion based on the data.

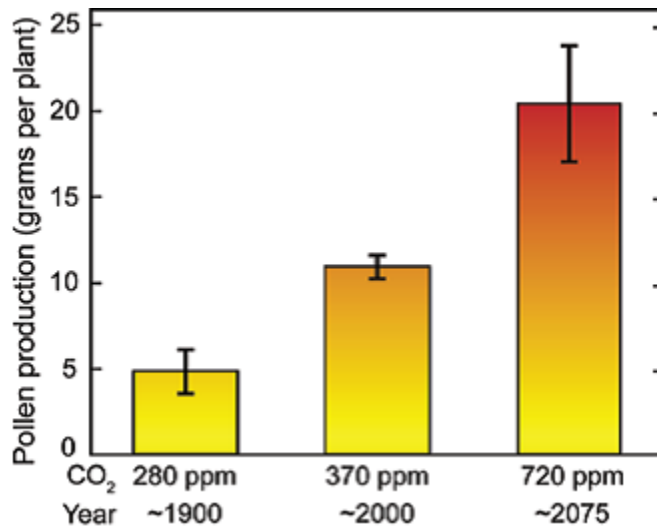
1.



<http://ete.cet.edu/gcc/?/resourcecenter/slideshow/4/59>

My conclusion:

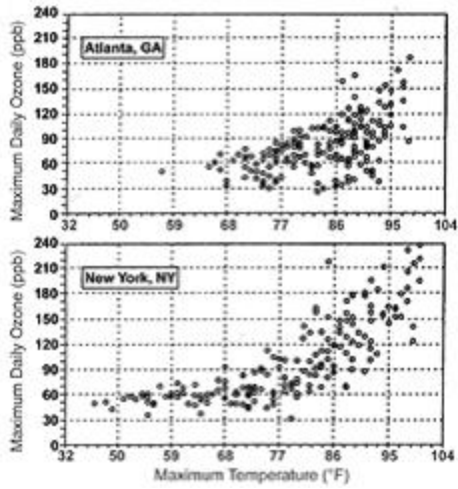
2.



<http://ete.cet.edu/gcc/?/resourcecenter/slideshow/4/59>

My conclusion:

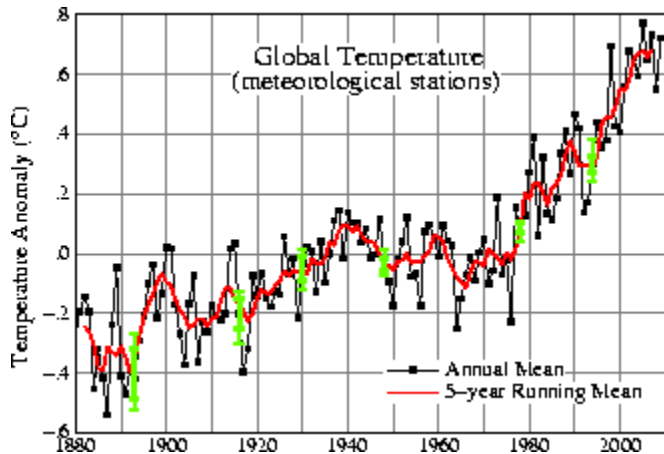
3.



<http://ete.cet.edu/gcc/?/resourcecenter/slideshow/4/59>

My conclusion:

Global Mean Surface Temperature Changes—1880-present



Red line—5-year running averages
Black line—annual (yearly) averages (Normal seasonal fluctuations cause the variability seen on the graph.)

<http://data.giss.nasa.gov/gistemp/graphs/>

My conclusion:
